

# MATH 134 Calculus 2 with FUNDamentals

## Section 6.2: Volume, Density, and Average Value

In this section we highlight a few important applications of integration you are likely to encounter in your future courses. We learn how to find the volume of a three-dimensional solid by summing up areas of cross sections, how to find the average value of a function, and how to compute the total population given a radial density function.

### Average Value

Recall that the average of  $n$  numbers  $y_1, y_2, \dots, y_n$  is given by  $\frac{y_1 + y_2 + \dots + y_n}{n}$ .

How do we generalize this formula to find the average value of a function? For example, suppose we know the temperature in a room as a function of time. How do we calculate the average temperature over a particular time interval?

We begin by choosing  $n$  points  $x_1, x_2, \dots, x_n$  in an interval  $[a, b]$  and computing the average of their function values:

$$\frac{f(x_1) + f(x_2) + \dots + f(x_n)}{n}$$

If we let  $\Delta x = \frac{b-a}{n}$ , then we find that  $\frac{1}{n} = \frac{\Delta x}{b-a}$ . Therefore

$$\text{Average Value} \approx \frac{\Delta x}{b-a} (f(x_1) + f(x_2) + \dots + f(x_n)) = \frac{1}{b-a} (f(x_1) + f(x_2) + \dots + f(x_n)) \Delta x.$$

The right-hand side of the previous equation can be interpreted as a Riemann sum (e.g., a right-hand sum). Taking the limit as  $n \rightarrow \infty$  (which means sampling the function at more and more  $x$ -values) leads to an integral definition for the average value of a function  $f(x)$  on the interval  $[a, b]$ :

$$\boxed{\text{Average Value} = \frac{1}{b-a} \int_a^b f(x) dx.} \quad (1)$$

**Example 1:** Find the average value of  $f(x) = \sin x$  on the interval  $[0, \pi]$ .

**Answer:** Using the formula above, we compute the average value to be

$$\frac{1}{\pi - 0} \int_0^\pi \sin x dx = \frac{1}{\pi} \cdot -\cos x \Big|_0^\pi = -\frac{1}{\pi} (\cos \pi - \cos 0) = -\frac{1}{\pi} (-1 - 1) = \frac{2}{\pi} \approx 0.637.$$

One way to visualize the average value of a function is to interpret it as the average “height” (Figure 1).

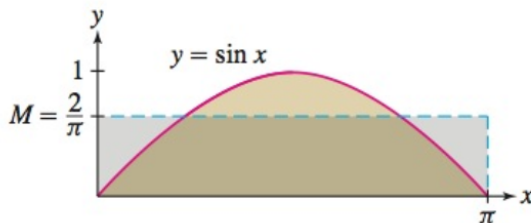


Figure 1: The average value of a function is the average height  $M$  that makes the area under the graph equal to the area of the rectangle with height  $M$  and base  $b - a$ .

**Exercise 1:** Find the average value of  $f(x) = 4 - x^2$  on  $[-2, 2]$ . Illustrate your answer with a graph as in Figure 1.

**Exercise 2:** Find the average value of  $g(t) = \sqrt{t}$  on  $[1, 4]$ .

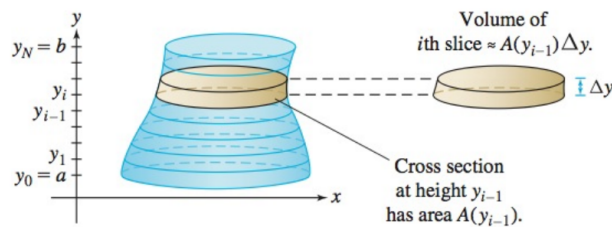
## Volume

How do we calculate the volume of a 3D solid? One technique is to divide the solid into thin cross sections and then add up the volumes of each cross section (see Figure 2). Suppose that there are  $n$  cross sections each with the same width  $\Delta y$ . If we know the area of the cross section at a height of  $y_i$  is given by  $A(y_i)$ , then the volume of that cross section is  $A(y_i) \Delta y$  (see Figure 2). Thus, we have

$$\text{Volume} \approx A(y_0) \Delta y + A(y_1) \Delta y + \cdots + A(y_{n-1}) \Delta y.$$

Once again, this can be interpreted as a Riemann sum. As  $\Delta y \rightarrow 0$ , the sum above becomes an integral over the range of heights in the  $y$ -direction:

$$\text{Volume} = \int_a^b A(y) dy. \quad (2)$$



**DF FIGURE 2** Divide the solid into thin horizontal slices. Each slice is nearly a right cylinder whose volume can be approximated as area times height.

Note that there is nothing special here about taking horizontal cross sections. This technique for finding the volume of a solid works perfectly well using vertical cross sections (perpendicular to the  $x$ -axis) between  $x = a$  and  $x = b$ . In this case formula (2) becomes

$$\text{Volume} = \int_a^b A(x) dx. \quad (3)$$

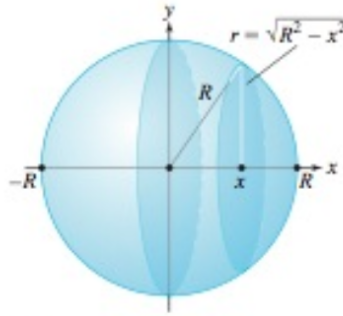


Figure 3: Finding the volume of a sphere of radius  $R$  using circular cross sections perpendicular to the  $x$ -axis.

**Exercise 3:** Use Figure 3 and circular cross sections perpendicular to the  $x$ -axis to show that the volume of a sphere of radius  $R$  is  $V = \frac{4}{3}\pi R^3$ .

**Exercise 4:** Find the volume of the solid whose base is the unit circle  $x^2 + y^2 = 1$  with cross sections perpendicular to the  $x$ -axis equal to triangles whose height and base are equal.

**Hint:** Find the base of each triangle as a function of  $x$ .

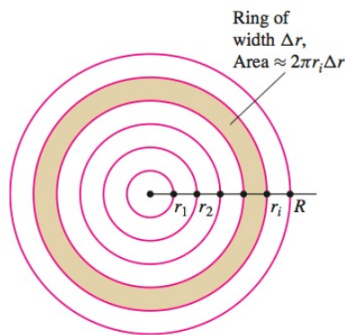


Figure 4: The area of a small ring of radius  $r_i$  is approximately the outer circumference  $2\pi r_i$  times the width  $\Delta r$  (think of cutting the ring and stretching it out into a rectangle).

### Density: Computing Total Population

Suppose that we want to calculate the population of a city (e.g., Boston) given a function  $\rho(r)$  that measures the number of people living  $r$  units from the center of the city. The function  $\rho(r)$  is called a **radial density function** — think of concentric circles with a radius of  $r$ , where the population is roughly the same on a given circle. Typically  $\rho(r)$  is a decreasing function since we expect there to be less people as we move further away from the center of the city.

The number of people living in a small circular ring of radius  $r_i$  and width  $\Delta r$  is approximately  $2\pi r_i \cdot \Delta r \cdot \rho(r_i)$ . This is the area of the ring times the population density on the ring (see Figure 4). To find the total population from the center of the city  $r = 0$  to a particular radius  $r = R$ , we sum up the populations on each ring. As  $\Delta r \rightarrow 0$ , the sum becomes an integral. In other words, we have the following formula for computing total population:

$$\boxed{\text{Population within a radius } R \text{ of the center} = 2\pi \int_0^R r\rho(r) dr.} \quad (4)$$

**Exercise 5:** Suppose that Worcester’s population has a radial density function of  $\rho(r) = 12(2 + r^2)^{-1}$ , where  $r$  is the distance (in miles) from the city center and  $\rho$  is measured in thousands of people per square mile.

(a) Calculate the number of people living within 15 miles of the center of Worcester.

(b) How would you set up the integral to calculate the number of people living between 5 and 10 miles from the center of Worcester?